

CONTESTANT ID #: _____

GRADE LEVEL : _____


*Place Contestant ID label here BEFORE
Contest Begins*



Maps, Graphs, & Charts

District Contest

Grades 4-5

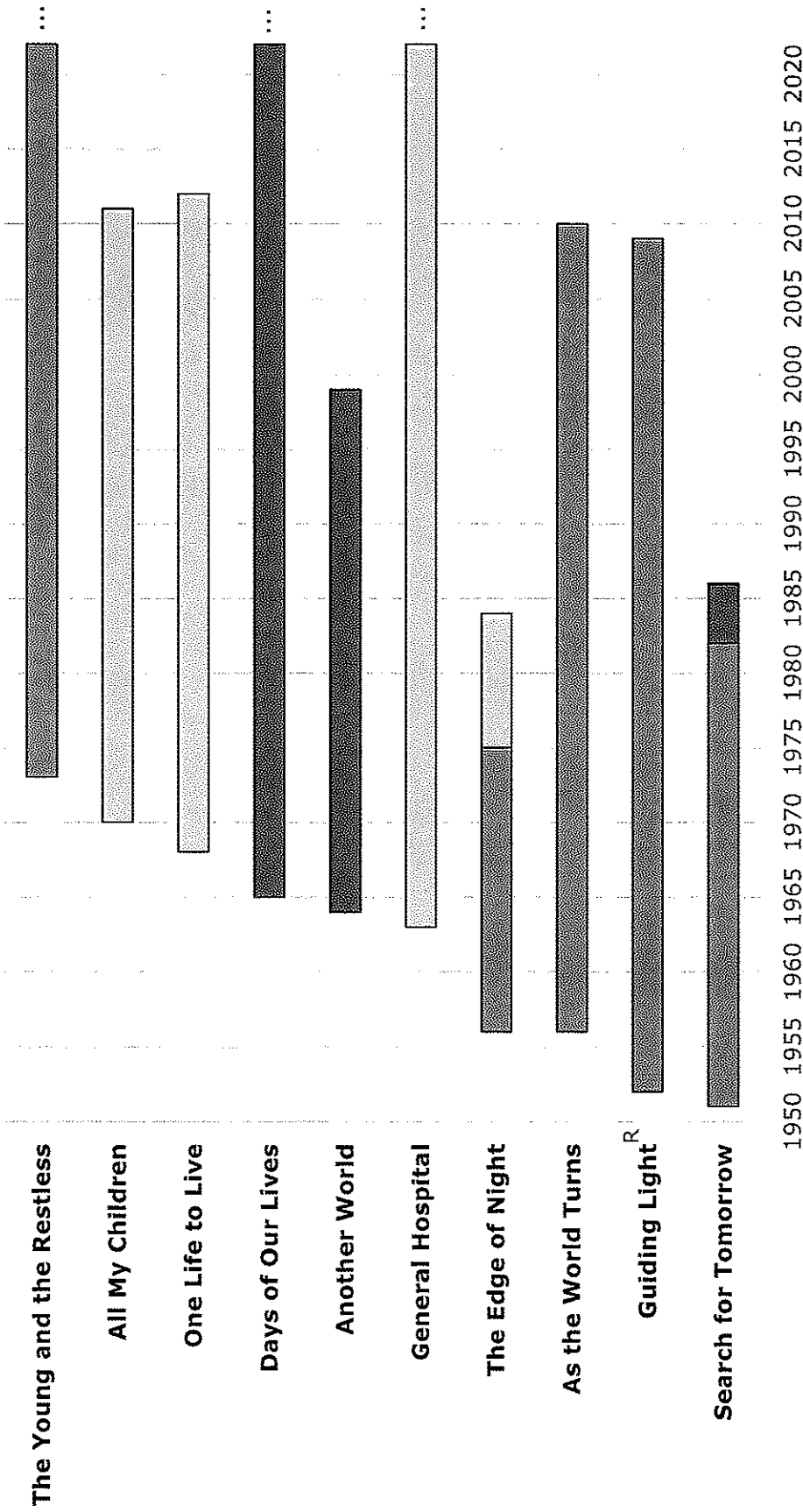


2023

FINAL SCORE: _____

(Please do not open test until the signal is given to begin.)

American Soap Operas

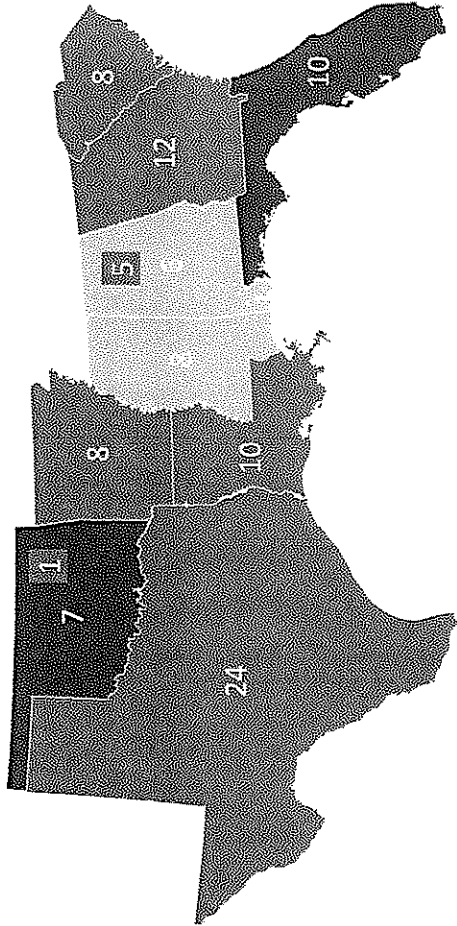


R = started on radio in 1937
 ... = still on the air today

CBS
 ABC
 NBC

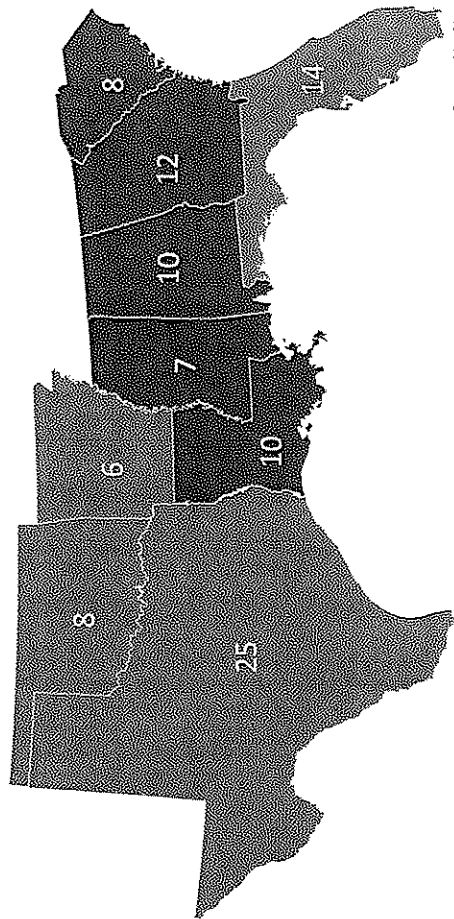
Electoral Maps – American South

Electoral Map 1960



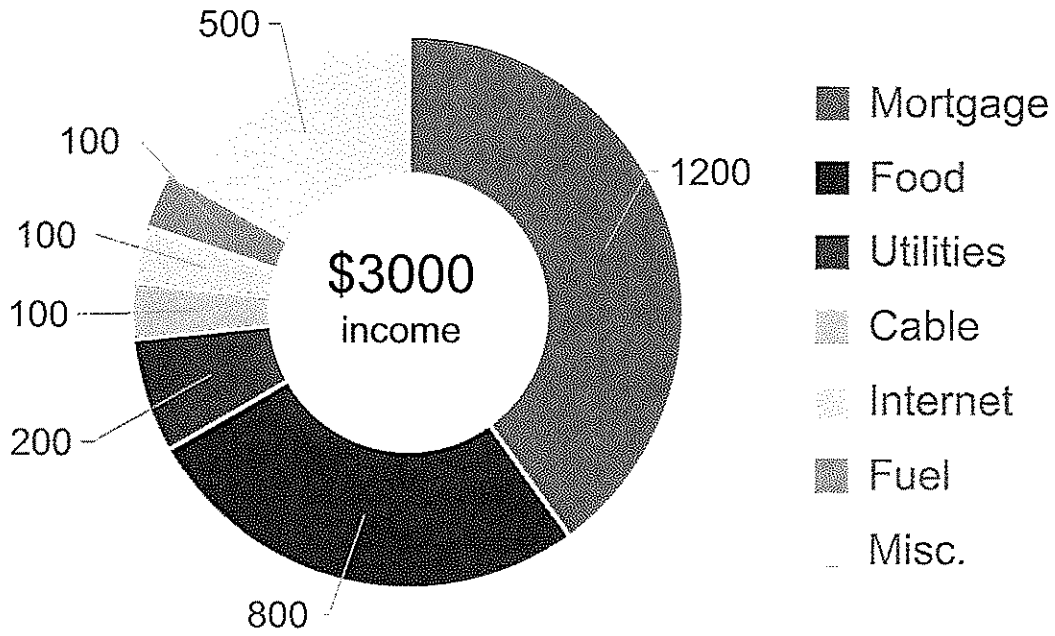
	Democrat	Democrat - Alt	Republican
1960	Kennedy	Byrd	Nixon
1964	Johnson		Goldwater

Electoral Map 1964



Powered by MapInfo
© GeoNames, Microsoft, TomTom

Monthly Expenses



Bar Chart – *American Soap Operas* – The chart shows the time span for each soap opera and the networks the soap opera aired on.

1. What soap opera began in 1965?

A. The Edge of Night	B. Days of Our Lives
C. General Hospital	D. All My Children

2. What network did *As the World Turns* air on?

A. NBC	B. ABC	C. CBS	D. All three of these.
--------	--------	--------	------------------------

3. Which soap opera began airing on CBS and switched to ABC in 1975?

A. One Life to Live	B. Search for Tomorrow
C. The Edge of Night	D. The Young and the Restless

4. How many years was *Another World* on the air?

A. 30 years	B. 35 years	C. 40 years	D. 45 years
-------------	-------------	-------------	-------------

5. Which two soap operas began the same year?

A. Search for Tomorrow and Guiding Light
B. One Life to Live and All My Children
C. Days of Our Lives and Another World
D. The Edge of Night and <i>As the World Turns</i>

6. In total (radio and TV), how many years was *Guiding Light* on the air?

A. 72 years	B. 68 years	C. 62 years	D. 58 years
-------------	-------------	-------------	-------------

7. Order these three soap operas in order from shortest running to longest running:
All My Children, As the World Turns, and The Young and the Restless

A. All My Children, <i>As the World Turns</i> , <i>The Young and the Restless</i>
B. <i>The Young and the Restless</i> , All My Children, <i>As the World Turns</i>
C. All My Children, <i>The Young and the Restless</i> , <i>As the World Turns</i>
D. <i>The Young and the Restless</i> , <i>As the World Turns</i> , All My Children

Maps – Use the *Electoral Maps - American South* graphics showing the number of electoral votes each candidate received during 1960 and 1964 elections.

8. Which candidate received all the votes from Georgia in 1964?

A. Johnson	B. Kennedy	C. Goldwater	D. Nixon
------------	------------	--------------	----------

9. How many of these states gave their electoral votes to the Democratic candidate in 1964?

A. 4	B. 5	C. 6	D. 7
------	------	------	------

10. Which two states split their electoral votes among multiple candidates in 1960?

A. Arkansas and Georgia	B. Texas and Mississippi
C. Oklahoma and Alabama	D. Florida and South Carolina



Maps, Graphs, & Charts
Grades 4-5
District Contest

GRADERS: Write scores and initial.

Score 1: _____

Score 3: _____

Score 2: _____

FINAL: _____

Contestant Answer Sheet

Contestant ID: _____ Grade Level: _____

INSTRUCTIONS: Place the PRINTED CAPITAL letter of each answer choice (A, B, C, or D) in the blank corresponding to the test item number. SCORING: +5 for each correct answer; -2 for each incorrect answer; no deduction for skipped or unanswered items. Visible erasures and mark-outs constitute a 2-point deduction ONLY if a correct answer is not written in the answer space.

- | | | |
|-----------|-----------|-----------|
| 1. _____ | 16. _____ | 31. _____ |
| 2. _____ | 17. _____ | 32. _____ |
| 3. _____ | 18. _____ | 33. _____ |
| 4. _____ | 19. _____ | 34. _____ |
| 5. _____ | 20. _____ | 35. _____ |
| 6. _____ | 21. _____ | 36. _____ |
| 7. _____ | 22. _____ | 37. _____ |
| 8. _____ | 23. _____ | 38. _____ |
| 9. _____ | 24. _____ | 39. _____ |
| 10. _____ | 25. _____ | 40. _____ |
| 11. _____ | 26. _____ | |
| 12. _____ | 27. _____ | |
| 13. _____ | 28. _____ | |
| 14. _____ | 29. _____ | |
| 15. _____ | 30. _____ | |



Maps, Graphs, & Charts
Grades 4-5
District 2023

ANSWER KEY

REMINDERS: PRINTED CAPITAL letters only. SCORING: +5 for each correct answer; -2 for each incorrect answer; no deduction for skipped or unanswered items. Visible erasures and mark-outs constitute a 2-point deduction ONLY if a correct answer is not written in the answer space.

- | | | |
|--------------|----------------------|----------------------|
| 1. B | 16. D | 31. C (140) |
| 2. C | 17. A | 32. A (205-6) |
| 3. C | 18. D (102) | 33. D (102) |
| 4. B | 19. D (152) | 34. A (31) |
| 5. D | 20. A (207) | 35. B (43) |
| 6. A | 21. C (22) | 36. C (160) |
| 7. C | 22. B (40) | 37. D (209) |
| 8. C | 23. C (66) | 38. B (179) |
| 9. A | 24. A (141) | 39. B (116) |
| 10. C | 25. D (175) | 40. C (138) |
| 11. A | 26. A (191) | |
| 12. D | 27. A (123) | |
| 13. A | 28. C (cover) | |
| 14. D | 29. D (47) | |
| 15. C | 30. B (95) | |